

JPS Framework for teaching– Stage 2, Week 6 (Term 3)

You will need access to a digital device to complete **some** of the following activities. You will need help from a parent/carer and some paper. Remember when you need to login to external sites (e.g typing club) you may need to use **YOUR** email – e.g. john.smith@education.nsw.gov.au



	Monday 16 th August	Tuesday 17 th August	Wednesday 18 th August	Thursday 19 th August	Friday 20 th August
Morning	<p>Reading Complete the cloze passage.</p>	<p>Reading Choose a book or part of a book and record yourself reading aloud. Listen to it and think about how you can improve. E.g. Fluency, speed, paying attention to punctuation, <u>self-correcting</u>, monitoring etc. You might also like to read for someone else in your house and get them to give you some feedback.</p>	<p>Reading Log onto Reading Eggress - complete 1 of your assigned tasks. Your teacher will be able to see what you have completed. If you don't have access to a device, write a summary of a book you have read.</p>	<p>Reading Using the fiction <u>text</u> you have read on Reading Eggress. <u>Suns</u> <u>hine</u> <u>Online</u>, or any other <u>txt</u> that is of interest to you. Create 5 questions you would ask someone to see if they have read the story carefully. They could be multiple choice, true or false or require a sentence answer.</p>	<p>Reading Log onto Reading Eggress – complete 1 of your assigned tasks. Your teacher will be able to see what you have completed. If you don't have a device, read a book and write down some questions that you would like to ask the main character in the book.</p>
	<p>Writing Use the template to plan a persuasive writing piece.</p>	<p>Writing Write a persuasive argument on your topic and include 3 reasons with examples. Try to include paragraphs in your writing.</p>	<p>Writing Edit your persuasive argument and try to improve it by including extra persuasive techniques and persuasive language.</p>	<p>Class Zoom Meeting 10am Join your class Zoom using the information in the lesson on Google Classroom. Editing</p>	<p>Writing Editing</p>
	CRUNCH N' MUNCH	CRUNCH N' MUNCH	CRUNCH N' MUNCH	CRUNCH N' MUNCH	CRUNCH N' MUNCH

	<p>Spelling Write all of your spelling words out once using look, cover, write, check. Write your spelling words using different colours and fonts. Try to make each word look different. Log onto reading eggspress and complete your spelling activity.</p>	<p>Library with Mrs Jones Read a book and complete some of the suggested activities.</p>	<p>Spelling Write all of your spelling words out once using look, cover, write, check. Put your spelling words in reverse alphabetical order. For example: zoo, yellow, white, telephone.</p>	<p>Spelling Write all of your spelling words out once using look, cover, write, check. Write sentences that include as many of your spelling words as you can. Write at least five sentences.</p>	<p>CAPA with Mrs T. Complete the second ventriloquist lesson.</p>
Break					
Middle	<p>Maths *Problem solving *Kahoot Quiz *Money- representing amounts of money</p>	<p>Maths *Problem solving *Kahoot Quiz *Money- counting amounts of money</p>	<p>Maths *Problem solving *Kahoot Quiz *Money- calculating change</p>	<p>Maths *Problem solving *Kahoot Quiz *Money- counting money and calculating change</p>	<p>Maths *Problem solving *Kahoot Quiz *Money- counting amounts of money</p>
	<p>Fitness/Wellbeing Participate in a virtual workout or an outside physical activity such as circuit training, running or handball. Check out the links on Google Classroom for ideas.</p>	<p>Fitness/Wellbeing Participate in a mindfulness task such as journaling, doing a puzzle or colouring. Check out the links on Google Classroom for ideas.</p>	<p>Fitness/Wellbeing Participate in a virtual workout or an outside physical activity such as circuit training, running or handball. Check out the links on Google Classroom for ideas.</p>	<p>Fitness/Wellbeing Participate in a mindfulness task such as journaling, doing a puzzle or colouring. Check out the links on Google Classroom for ideas.</p>	<p>Fitness/Wellbeing Participate in a virtual workout or an outside physical activity such as circuit training, running or handball. Check out the links on Google Classroom for ideas.</p>
Break					
Afternoon	<p>History Complete activity on Olympic History.</p>	<p>PDH Bike safety</p>	<p>CAPA Choose your favourite character from a book and plan a costume to make you look like this character. Your costume MUST be made with objects from around your house.</p>	<p>Technology Login to typing club and spend 15 mins (max) practicing your typing skills. If you have access to a device, login to reading eggspress or mathletics to complete some activities. If</p>	<p>Science Heat energy questionnaire: Answer the questions on the Google Slide and copy the drawing at the end.</p>

			Submit your costume plan to google classroom.	not, write out an email to Mr Clarke about why we should or shouldn't have class pets at school.	
--	--	--	---	--	--

Problem Solving- Week 6

Complete 3 questions each day

<p>424 visitors need to ride the lift to the top of Telstra tower. Each elevator can fit 9 people. How many trips will it take to get everyone to the top?</p> <hr/>	<p>Maddie is making cupcakes. She has 157 sugar flowers to decorate the tops of her cakes. She wants to put 8 flowers on each one. How many cupcakes can she decorate?</p> <hr/>	<p>There is a crowd of 381 people all wanting to eat at a new cafe. If each table holds 6 people, how many tables will the restaurant need to seat the crowd?</p> <hr/>
<p>Rosie's egg farm has produced 722 eggs. How many half dozen cartons can she fill?</p> <hr/>	<p>Harry and his friends want to buy popcorn at the movies. They have \$176 and each popcorn tub costs \$7. How many tubs can they afford?</p> <hr/>	

<p>A box holds 8 chocolates. How many full boxes can be made with 224 chocolates?</p> <hr/>	<p>The tennis club has \$620 to spend on new equipment. Each tennis set costs \$31. How many sets can the club afford to buy?</p> <hr/>	<p>A school of 530 people are going on an excursion. Each bus holds 107 passengers. How many buses will be needed?</p> <hr/>
<p>There is a queue of 264 people for a new roller coaster. If the roller coaster holds 33 people, how many times does it need to run so each person gets a ride?</p> <hr/>	<p>A school has \$872 to spend on new carpet squares. Each square costs \$8. How many squares can the school afford to buy?</p> <hr/>	<p>Kayla has \$6.50 to spend on trading cards. If each card costs 25 cents, how many cards can Kayla afford to buy?</p> <hr/>
<p>An art teacher wants to buy 748 new paintbrushes. Brushes come in packs of 17. How many packs will she need to buy?</p> <hr/>	<p>A parent needs 864 slices of pizza for a party. If each pizza has 12 slices, how many pizzas does the parent need to buy?</p> <hr/>	<p>Christopher is on holidays and wants to buy some souvenirs. He has \$155 and each souvenir costs \$31. How many can he afford to buy?</p> <hr/>

Term 3 Year 3 Spelling Lists

Week 2	Week 3	Week 4	Week 5	Week 6
south	oil	dirt	saw	maul
couch	coil	birth	law	haul
pouch	soil	bird	prawn	sauce
cloud	spoil	third	fawn	launch
proud	spoilt	whirl	awful	taunt
idea	men	mine	else	often
sport	easy	maybe	child	large
break	clear	bottom	close	which
ready	strong	between	those	towards
heavy	instead	someone	speed	sentence
winter	key	something	caught	taste
sort	final	litre	children	torch
port	east	foal	ray	laugh
busy	bear	goal	mild	cheer
storm	finish	bulb	copy	porch
pretty	tough	lunch	nurse	eaten
herself	rough	sudden	chose	waste
council	valley	playing	similar	useful
happily	locate	sometimes	indeed	eating
breakfast	monkey	somewhere	afternoon	screen
library	drawer	injury	depot	plait
counter	success	display	arrival	penguin
exercise	touched	accident	urgent	criminal
cupboard	November	December	crevice	sandwich
parachute	treasure	beginning	straight	beautiful

Term 3 Year 4 Spelling Lists

Week 2	Week 3	Week 4	Week 5	Week 6
knot	yellow	direct	business	wrist
kneel	sorrow	effect	quickness	wrote
known	shown	inject	laziness	wrong
knuckle	fellow	select	closeness	whole
knitting	barrow	defect	brightness	wrestle
chief	does	heart	join	wrap
lately	month	speak	chair	raise
include	proper	dinner	height	ready
together	yourself	amount	finally	shown
darkness	although	measure	station	myself
flour	herd	discover	electric	further
dash	trust	mountain	spoil	indeed
useful	public	everyone	avoid	narrow
depend	safely	thief	frozen	herself
garage	standard	scarf	lovely	clothes
whistle	content	dying	cruelly	always
whisper	decade	rough	finalist	imagine
advertise	different	cough	silently	tomorrow
activities	dictionary	bough	highway	lazily
backward	yourself	courage	December	flavour
hoarse	kiosk	triangular	rhyme	angrily
glacier	hygiene	hexagonal	tsunami	shrieked
humorous	revision	pentagonal	reluctant	courtesy
generation	invisible	millimetres	sceptical	travelled

Reading- Monday Week 6


All States Should Play in the State of Origin Cloze Activity

Fill in the missing words using the word bank below.

believe	teams	rugby	conclusion	Australia	Origin
Maroons	play	current	fan	South	permitted
healthy	states	territories	teams	includes	supporters

I firmly _____ that all states in Australia should participate in the State of Origin. The _____ formation of the competition is unsportsmanlike and needs to be improved. Allowing all states to play would be more inclusive, it would gain supporters and it would allow a _____ Australia-wide competitiveness among teams.

Firstly, the only two teams that compete in the State of Origin are the New _____ Wales Blues and the Queensland _____. Allowing only two states out of six in Australia to _____, the series shows preferential treatment to New South Wales and Queensland, while excluding the four remaining _____. Why are New South Wales and Queensland _____ to participate but not the others? The _____ supporters from around Australia must feel excluded which is not fair.



Secondly, having only two _____ in the State of _____ means only two groups of supporters. The majority of the supporters of this sport come from New South Wales and Queensland. If all states in Australia were to play in the State of Origin, there would be four times the number of _____. More supporters would mean a nation-wide _____ base, a fully inclusive competition, more money for the sport and an increase in knowledge and interest among younger sport fans.

Finally, the current sporting rivalry between the Blues and Maroons is one of the biggest in _____. While this

provides great competitiveness among _____ and supporters, a nation-wide competition would significantly increase and improve this. A State of Origin which _____ all six states would mean all six states were competing against each other, and sporting rivalries are a great way to learn about other teams and the states from which they come.

In _____, it is obvious that all states and _____ should play in the State of Origin. This is to promote inclusivity, gain supporters and improve the competitiveness of the competition.

Writing- Monday Week 6

Think of a topic and plan your persuasive writing piece of work:

My Persuasive Prewriting Template

Introduction

Point of View/Argument: _____ _____ _____

Body

Reason 1:	Reason 2:	Reason 3:
_____ _____ _____ _____	_____ _____ _____ _____	_____ _____ _____ _____
Evidence: _____ _____ _____ _____ _____	Evidence: _____ _____ _____ _____ _____	Evidence: _____ _____ _____ _____ _____

Conclusion

_____ _____ _____ _____ _____

Mathematics- Monday Week 6

Draw the coins you could use to show these amounts:



35c



90c



60c



45c



60c



85c



\$2.65




\$1.95



\$4.20

History of the Olympics

Cloze Sentences



southwest	sacred	reflecting	stadium	cauldron
winner	Hera	war	1936	represent

Instructions: Use the words from the box to complete the sentences about the history of the Olympic Games.

1. The ancient Olympic Games were held at Olympia, a valley in _____ Greece.
2. In the first Olympic Games, the only event was a race from one end of the _____ to the other.
3. The _____ of the ancient Olympic Games received a wreath of leaves, not a medal as they do now.
4. The Olympic Games were more important than _____ in ancient Greece.
5. The Olympic torch is lit by _____ the rays of the sun using a parabolic mirror.
6. Every modern Olympic torch since _____ has been lit at the site of the first Olympic Games.
7. The '_____ truce' allowed people from all over Greece to travel to the Olympics in safety.
8. In ancient times, the Olympic flame was lit and kept at the Altar of _____.
9. The final torchbearer has the honour of using the torch to ignite the _____ where the Olympic flame will burn for the duration of the games.
10. Athletes from all over the world _____ their countries and compete against the best of the best.

History of the Olympics

Cloze Sentences Answers



1. The ancient Olympic Games were held at Olympia, a valley in southwest Greece.
2. In the first Olympic Games, the only event was a race from one end of the stadium to the other.
3. The winners of the ancient Olympic Games received a wreath of leaves, not a medal as they do now.
4. The Olympic Games were more important than war in ancient Greece.
5. The Olympic torch is lit by reflecting the rays of the sun using a parabolic mirror.
6. Every modern Olympic torch since 1936 has been lit at the site of the first Olympic Games.
7. The 'sacred truce' allowed people from all over Greece to travel to the Olympics in safety.
8. In ancient times, the Olympic flame was lit and kept at the Altar of Hera.
9. The final torchbearer has the honour of using the torch to ignite the cauldron where the Olympic flame will burn for the duration of the games.
10. Athletes from all over the world represent their countries and compete against the best of the best.

Reading- Tuesday Week 6

Oral reading:

Choose a book or part of a book and record yourself reading aloud. Listen to it and think about how you can improve. Eg. Fluency, speed, paying attention to punctuation, self correcting, monitoring etc.

You might also like to read for someone else in your house and get them to give you some feedback.

Writing- Tuesday Week 6

Using your plan from yesterday's persuasive writing task, write an argument about your topic. Try to include paragraphs in your work and persuasive language and techniques.

Library- Tuesday Week 6

Stage Two - At Home Library Program

We will be using an online education resource called Story box Library online. The school has paid a subscription to this so all students can access it from their devices at home. The Library lessons will be based on stories from this website. After listening to the story, you may choose to do just one of the activities below or you can complete as many as you like or have time to do.

Term 3 - Week 6

My Folks Grew Up in the 80's **by Beck & Robin Feiner**

<https://storyboxlibrary.com.au/login>


Please log onto Story box library as per instructions

Username: jamo20 Password: jamo20

In the search bar type in **folks** and press enter

Hover the cursor over the book **My Folks Grew Up in**

the 80's and click the **Play** button. Watch and listen carefully to the story.



Things to do after you have listened to the story

- Write about your favourite illustration in the story. Explain your choice.
- Create a list of questions you have about the 1980's after listening to this story.
- Do you think this book is a fiction or non-fiction book? Give reasons for your answer.
- Research the 1980's and create a timeline of some important events that took place.
- Choose an object from the illustrations to investigate further. Find out: a) the name of the object b) the purpose or role of the object c) how the object worked or how it operated.
- Write some questions you could ask your parents or grandparents about the decade they grew up in.
- Write a list of songs and movies from the 1980's.
- Draw up a chart headed: Entertainment, Technology and Communication, Food, Clothing, Leisure and exercise and toys.

Compare these areas of life in the 1980's with our current decade.
Consider those things that have been replaced from the 1980's and
how these have changed the way we live.

Mathematics- Tuesday Week 6

How Much Money Is in My Jar?

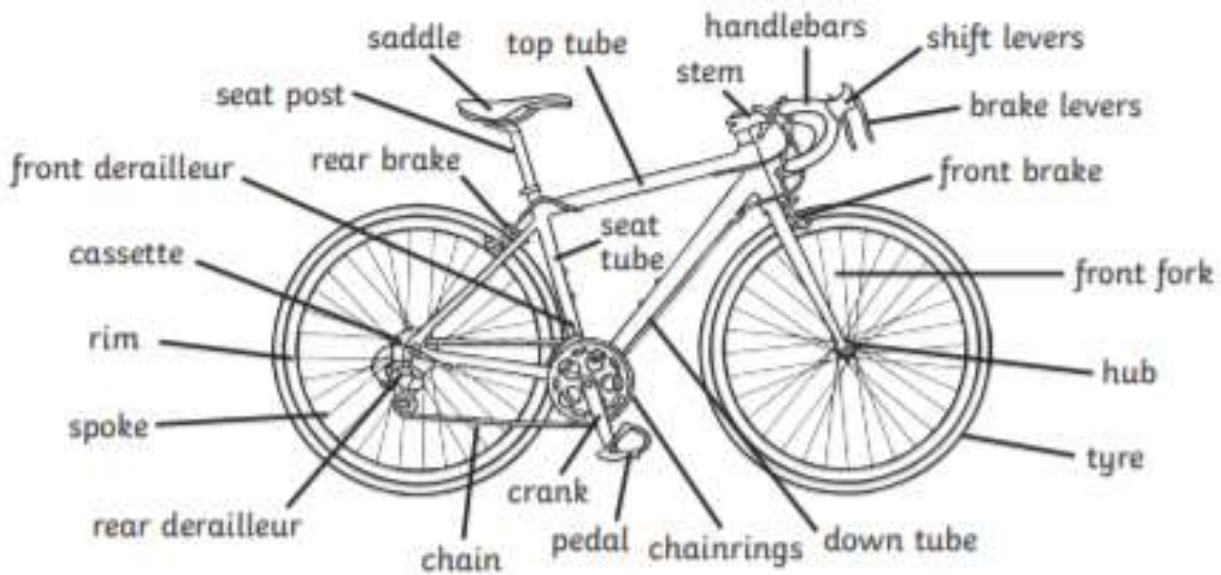


How Much Money Is in My Jar?



Learn and Label Parts of a Bike

1. Study the diagram below and read the labels out loud. Which names have you heard before? Decide which labels you are going to use to label your own diagram and highlight them or underline them - you can choose to use the most simple labels or all 22.
2. Cut out your words from below and stick them down onto the black diagram on the next page. See if you can add arrows to match the right part of the bike with the word.
3. When all your labels are stuck down and your arrows are drawn, check back to this page and see if you were right.



cassette	handlebars	rim	spoke	rear derailleur
front fork	seat post	stem	tyre	front derailleur
rear brake	chainrings	saddle	crank	pedal
front brake	shift levers	spoke	chain	
brake levers	handlebars	seat tube	hub	

My Labelled Bike



Reading- Wednesday Week 6

Log onto Reading Eggpress - complete 1 of your assigned tasks. Your teacher will be able to see what you have completed. If you don't have access to a device, write a summary of a book you have read.
















Writing- Wednesday Week 6

















Edit your piece of writing from yesterday. Think about spelling, punctuation, including strong persuasive language and persuasive techniques. Try to IMPROVE your first draft.

Mathematics- Wednesday Week 6

Check Your Change!

Check the change the shopkeeper has given you. Are you happy to walk out of the shop with that change or do you need to go back and inform her of a mistake?

You buy	You pay	Your change	'Thanks for my change!' or 'Excuse me!'
			<div style="border: 1px solid black; border-radius: 10px; height: 60px; width: 100%;"></div>
			<div style="border: 1px solid black; border-radius: 10px; height: 60px; width: 100%;"></div>
			<div style="border: 1px solid black; border-radius: 10px; height: 60px; width: 100%;"></div>
			<div style="border: 1px solid black; border-radius: 10px; height: 60px; width: 100%;"></div>
			<div style="border: 1px solid black; border-radius: 10px; height: 60px; width: 100%;"></div>

You buy	You pay	Your change	'Thanks for my change!' or 'Excuse me!'
 <p>\$69.95</p>			
 <p>\$8.15</p>			
 <p>95c</p>			
 <p>\$3.65</p>			

Art- Wednesday Week 6

Choose your favourite character from a book and plan a costume to make you look like this character. Your costume **MUST** be made with objects from around your house. Eg. You might think of props that your character uses etc.

Reading- Thursday Week 6

Using the fiction text you have read on Reading Eggpress, Sunshine Online, or any other txt that is of interest to you. Create 5 questions you would ask someone to see if they have read the story carefully. They could be multiple choice, true or false or require a sentence answer.

Spot the Mistake

When pencils were first invented, moist bread was used to erase any mistakes!

Read the sentences below. Can you spot the spelling, grammar and punctuation mistakes?

1. There not in they're house because their over they're, in the park.

2. The golden sands felt warm and soothing beneth my worn out and weary feet. Their where beads of condensation dripping from my cold refreshing glass off water.

3. You're car is blocking are drive. Our you going to move it soon. I think your being most inconsiderate!

4. Swaying in the wind, the trees dances to the rythm of the storm. The moon looked down on the danced trees and smiled in ameusement at the glittering stars.

Mathematics- Thursday Week 6

Questions:

1. If I bought a coffee and 1 plain milk, how much would it cost altogether?

Answer:

2. If I bought 2 chicken pieces and 1 salad box, how much would it cost altogether?

Answer:

3. How much change would I get from buying the chicken pieces and salad box if I paid with a \$20 note?

Answer:

4. Choose any two items and calculate the total cost.

Answer:

ALBERT'S Cafe



Drinks

coffee	\$3.50
tea	\$2.80
hot chocolate	\$4.20
milkshake	\$3.65
orange juice (450 mL)	\$2.80
apple juice (600 mL)	\$2.90
plain milk (300 mL)	\$1.50



Lunch

ham sandwich	\$4.80
salad roll	\$4.25
hamburger	\$6.60
fries	\$3.70
cheese wrap	\$4.10
chicken piece	\$5.00
salad box	\$4.25



Breakfast

toast	\$1.20
eggs	\$6.90
pancakes	\$5.75
cereal	\$2.85
fruit plate	\$3.90
yogurt (125 g)	\$2.70



Dessert

banana cake	\$3.40
ice cream	\$4.25
muffins	\$2.60
biscuits	\$0.90
apple pie	\$1.80



opening hours:
 Mon - Fri: 9 am - 5:30 pm
 Sat: 9 am - 12:30 pm
 Sun: Closed

Technology- Thursday Week 6

Login to typing club and spend 15 mins (max) practicing your typing skills. If you have access to a device, login to reading eggspress or mathletics to complete some activities. If not, write out an email to Mr Clarke about why we should or shouldn't have class pets at school:

Reading- Friday Week 6

Log onto Reading Eggpress – complete 1 of your assigned tasks. Your teacher will be able to see what you have completed. If you don't have a device, read a book and write down some questions that you would like to ask the main character in the book.

Correct the Sentence Punctuation

Write the correct sentence underneath by adding in capital letters, full stops and question marks.

1. my brother's dog is called tess

2. on sunday she went to the park

3. the titanic sank in 1912

4. toby and mark are going to spain in march

5. martha took her children to the zoo yesterday

6. when i go to the shop i will get some crisps

7. sameera and i are going to town on friday

CAPA- Friday Week 6

Step 1: Watch ' Darci Lynee Wins Golden Buzzer on America's Got Talent 2017! ' for inspiration!

https://www.youtube.com/watch?v=Zg3RS-m0_3k

Step 2: Watch 'How to be a ventriloquist Lesson 2' to learn how to say some of the more difficult sounds like a ventriloquist.

<https://www.youtube.com/watch?v=qHE44kHH868>

Step 3. Practise saying these sounds until you feel confident.

Step 4: Video yourself using your puppet from last week to say each of the sounds in the Ventriloquist Lesson.

Step 5: Upload your video to your stream.

The links to the videos are below however if you have trouble, just copy and paste the website addresses into your search bar.

Also, if you have a sibling in Stage 2 or 3, you could even work together to save some time:)

I can't wait to say how many talented Ventriloquists we have at JPS!

Mrs T

Mathematics- Friday Week 6

The Cost of a Word



A = \$1 B = \$2 C = \$3 D = \$4 E = \$5 F = \$6 G = \$7 H = \$8 I = \$9
J = \$10 K = \$11 L = \$12 M = \$13 N = \$14 O = \$15 P = \$16 Q = \$17 R = \$18
S = \$19 T = \$20 U = \$21 V = \$22 W = \$23 X = \$24 Y = \$25 Z = \$26

Find the value of words by adding the value of each letter.



Your name:

 \$

Your friends' name:

 \$

Most expensive word:

 \$

Cheapest word:

 \$

Science- Friday Week 6

Physical Science

Question and Colour

Circle the answers to the questions.

Colour the picture by using the numbers and colours from your answers.

Thermometers are instruments used to measure...	1  air pressure.	2  windspeed.	3  temperature.
To produce heat from friction, surfaces should be...	4  soft surfaces rubbed together slowly.	5  rough and rubbed together quickly.	6  smooth surfaces rubbed together slowly.
Heat is transferred through conduction...	7  by infrared rays.	8  by currents in liquids and gases.	9  by moving from warmer to cooler areas in solid objects.
Heat is transferred through radiation...	10  by moving from warmer to cooler areas in solid objects.	11  by currents in liquids and gases.	12  by infrared rays.
Heat is transferred through convection...	13  by currents in liquids and gases.	14  by moving from warmer to cooler areas in solid objects.	15  by infrared rays.
Heat is a form of...	16  magic.	17  energy or power.	18  liquid.
Fire is a type of...	19  chemical reaction that gives off heat.	20  magnetic force.	21  electrical reaction that gives off heat.
Which items use electricity to produce heat?	22  iron, oven and dryer	23  gloves, blanket and scarf	24  fire, lava and geothermal hot springs

Physical Science

Question and Colour Answers

Thermometers are instruments used to measure...	1 air pressure.	2 windspeed.	3 temperature.
To produce heat from friction, surfaces should be...	4 soft surfaces rubbed together slowly.	5 rough and rubbed together quickly.	6 smooth surfaces rubbed together slowly.
Heat is transferred through conduction...	7 by infrared rays.	8 by currents in liquids and gases.	9 by moving from warmer to cooler areas in solid objects.
Heat is transferred through radiation...	10 by moving from warmer to cooler areas in solid objects.	11 by currents in liquids and gases.	12 by infrared rays.
Heat is transferred through convection...	13 by currents in liquids and gases.	14 by moving from warmer to cooler areas in solid objects.	15 by infrared rays.
Heat is a form of...	16 magic.	17 energy or power.	18 liquid.
Fire is a type of...	19 chemical reaction that gives off heat	20 magnetic force.	21 electrical reaction that gives off heat.
Which items use electricity to produce heat?	22 iron, oven and dryer	23 gloves, blanket and scarf	24 fire, lava and geothermal hot springs

yellow	blue	green	brown	pink	purple	red	orange
9	13	5	22	17	19	3	12

Look at your answers and write the number to match the colour.

yellow	blue	green	brown	pink	purple	red	orange

